


Calcola le sottrazioni



$$\begin{array}{r} 327 \\ -153 \\ \hline \end{array}$$



$$\begin{array}{r} 416 \\ -264 \\ \hline \end{array}$$



$$\begin{array}{r} 217 \\ - 33 \\ \hline \end{array}$$



$$\begin{array}{r} 635 \\ -212 \\ \hline \end{array}$$



$$\begin{array}{r} 758 \\ -194 \\ \hline \end{array}$$



$$\begin{array}{r} 535 \\ -261 \\ \hline \end{array}$$



$$\begin{array}{r} 653 \\ -282 \\ \hline \end{array}$$




$$\begin{array}{r} 477 \\ -357 \\ \hline \end{array}$$




$$\begin{array}{r} 408 \\ -151 \\ \hline \end{array}$$



$$\begin{array}{r} 936 \\ -275 \\ \hline \end{array}$$




$$\begin{array}{r} 759 \\ -186 \\ \hline \end{array}$$




$$\begin{array}{r} 618 \\ -573 \\ \hline \end{array}$$



$$\begin{array}{r} 854 \\ -671 \\ \hline \end{array}$$



$$\begin{array}{r} 516 \\ - 72 \\ \hline \end{array}$$



$$\begin{array}{r} 776 \\ -355 \\ \hline \end{array}$$



$$\begin{array}{r} 908 \\ -163 \\ \hline \end{array}$$



$$\begin{array}{r} 447 \\ - 86 \\ \hline \end{array}$$



$$\begin{array}{r} 649 \\ -297 \\ \hline \end{array}$$



$$\begin{array}{r} 504 \\ -271 \\ \hline \end{array}$$



$$\begin{array}{r} 868 \\ -592 \\ \hline \end{array}$$

