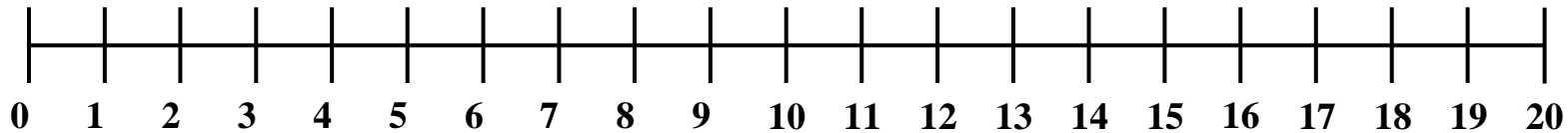
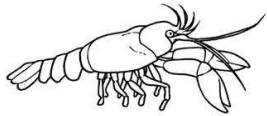


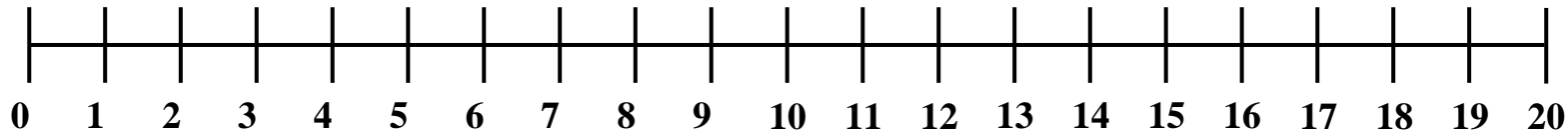
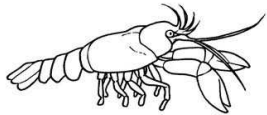
I salti del gambero

Il gambero parte da 0 e fa undici salti in avanti, poi ne fa tre indietro. A quale numero si ritrova?



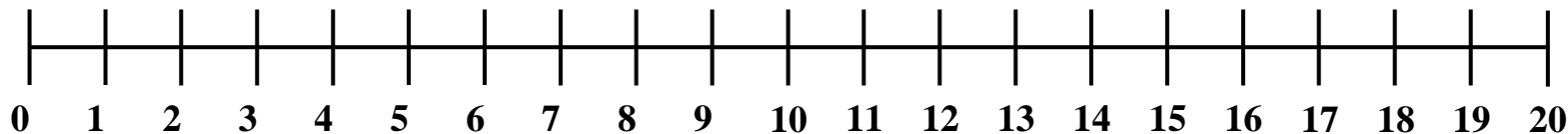

$11-3=...$

Il gambero parte da 0 e fa dodici salti in avanti, poi ne fa sei indietro. A quale numero si ritrova?



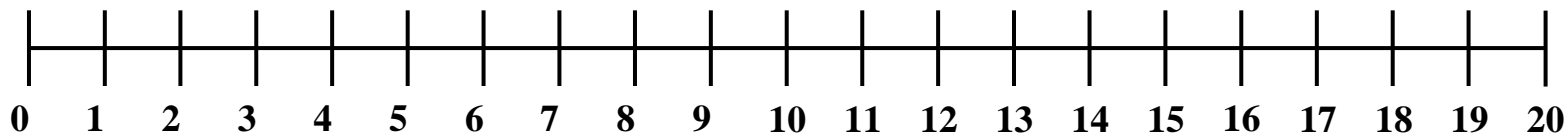

$12-6=...$

Il gambero parte da 0 e fa quindici salti in avanti, poi ne fa cinque indietro. A quale numero si ritrova?



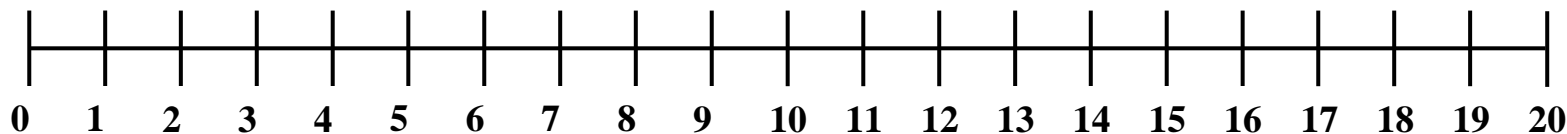

$15-5=...$

Il gambero parte da 0 e fa diciannove salti in avanti, poi ne fa nove indietro. A quale numero si ritrova?



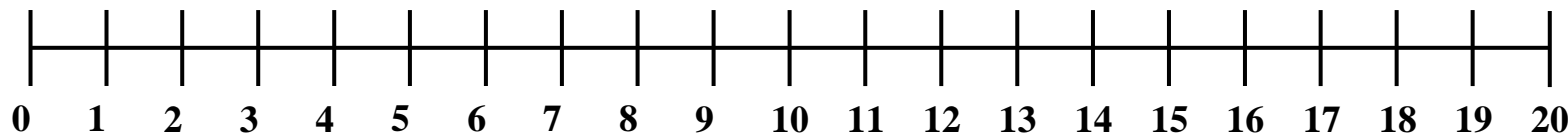

$$19-9=...$$

Il gambero parte da 0 e fa diciotto salti in avanti, poi ne fa cinque indietro. A quale numero si ritrova?



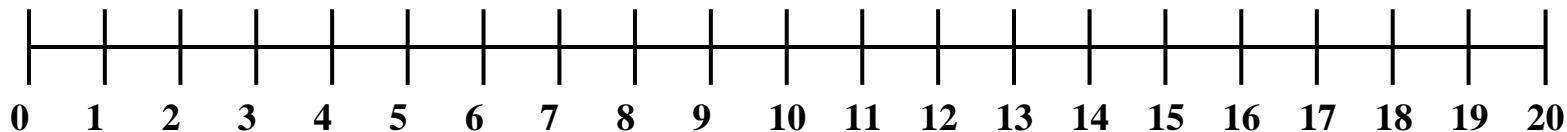

$$18-5=...$$

Il gambero parte da 0 e fa venti salti in avanti, poi ne fa dieci indietro. A quale numero si ritrova?



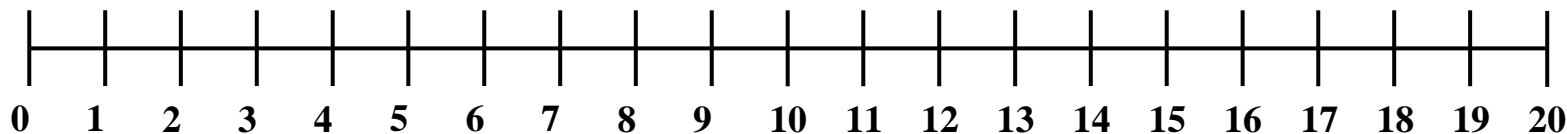

$$20-10=...$$

Il gambero parte da 0 e fa sedici salti in avanti, poi ne fa sei indietro. A quale numero si ritrova?



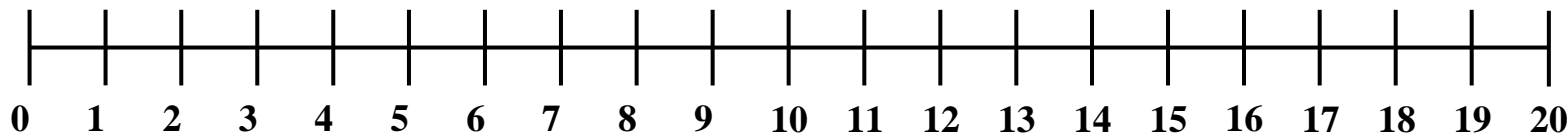

$$16-6=...$$

Il gambero parte da 0 e fa diciotto salti in avanti, poi ne fa cinque indietro. A quale numero si ritrova?



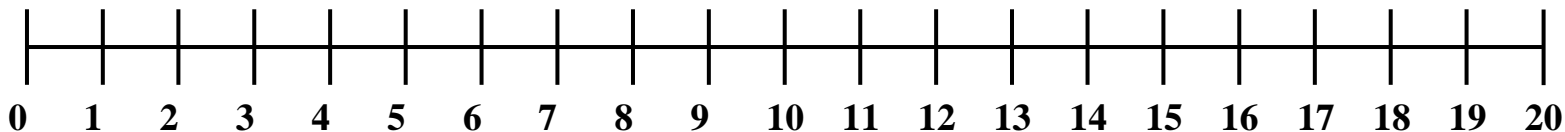

$$18-5=...$$

Il gambero parte da 0 e fa venti salti in avanti, poi ne fa dieci indietro. A quale numero si ritrova?



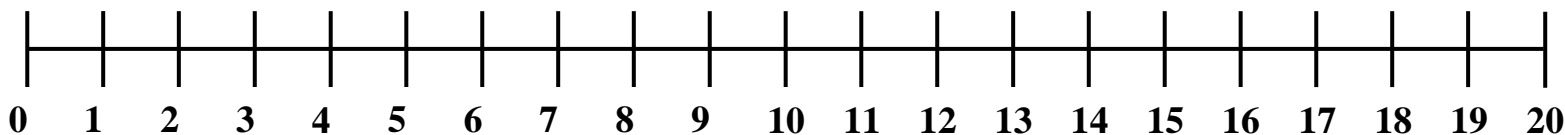
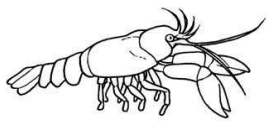
$$20-10=...$$

Il gambero parte da 0 e fa diciassette salti in avanti, poi ne fa sei indietro. A quale numero si ritrova?



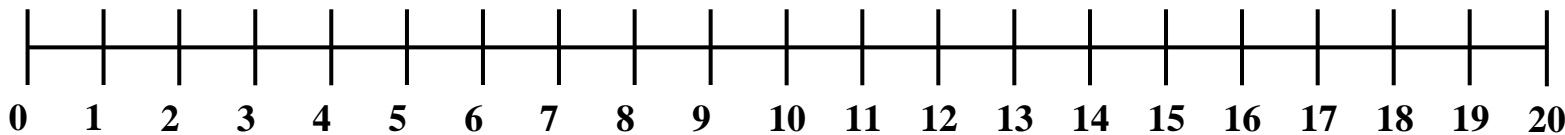

$$17-6=...$$

Il gambero parte da 0 e fa quattordici salti in avanti, poi ne fa sette indietro. A quale numero si ritrova?



$$14-7=...$$

Il gambero parte da 0 e fa sedici salti in avanti, poi ne fa otto indietro. A quale numero si ritrova?



$$16-8=...$$